

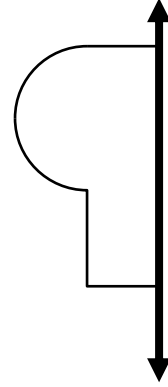
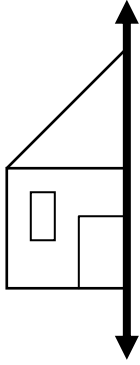
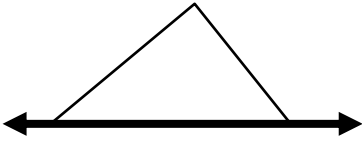
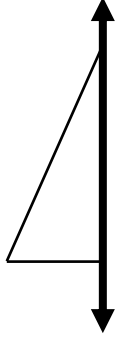
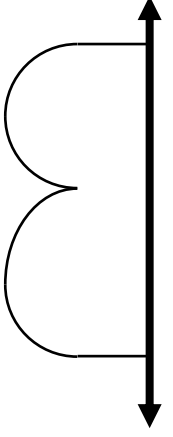


ADI-SOYADI:


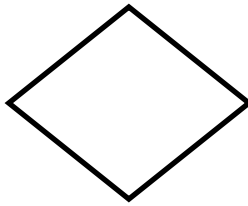

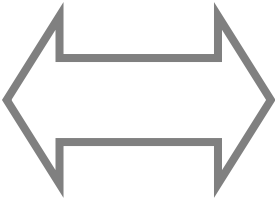
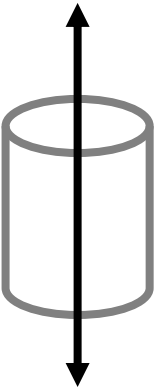
SİMETRİ- Simetrik şekiller

2.SINIF
MATEMATİK

Aşağıdaki yarım resimlerin simetriğini çiziniz.



Aşağıdaki şekillerin simetri doğrusunu çiziniz.



Veli:.....

Öğretmen:.....